

NAME _____

DATE _____

SCORE _____



MONEY MATH



Add the coins to find out how much you have in all. Write your answers in the box on the right.



NAME _____

DATE _____


SCORE _____



MONEY MATH



Subtract the coins to find out how much you have in all. Write your answers in the box on the right.



NAME _____

DATE _____

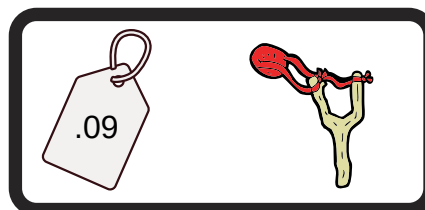








SCORE _____



MONEY MATH



Circle the coin or coins you will need to buy the toy on the right.



NAME _____

DATE _____

SCORE _____



MONEY MATH



How many coins do you have in all, write your answer in the box on the right.

