



Name: _____

7.1 Science Grade 4 - Page - 330-336

water and land

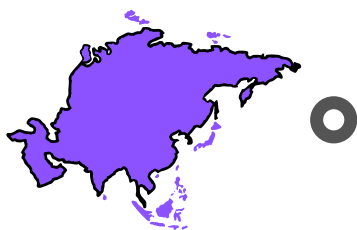
7 continents map with 5 oceans





Name: _____

7.1 Science Grade 4 - Page - 330-336
match the continents to their name



☐ **SOUTH AMERICA**



☐ **AUSTRALIA**



☐ **AFRICA**



☐ **ASIA**



☐ **ANTARCTICA**



☐ **EUROPE**



☐ **NORTH AMERICA**



Name: _____

7.1 Science Grade 4 - Page - 330-336

water and land

MAPPING OUR CONTINENTS AND OCEANS

- 1 Choose different colors to mark the continents on the map.
Color the references.

☐

North America

☐

Oceania

☐

Africa

☐

South America

☐

Europe

☐

Asia



- 2 Which continent is missing? Can you draw it?

- 3 Write the names of the oceans in the correct place on the map.

Atlantic Ocean

Pacific Ocean

Indian Ocean

Arctic Ocean

Southern Ocean





Name: _____

7.1 Science Grade 4 - Page - 330-336
water and land

Continents And Oceans

Look at the pictures and circle the correct words

 <div>Africa</div> <div>South America</div>	 <div>North America</div> <div>Oceania</div>
 <div>North America</div> <div>South America</div>	 <div>Europe</div> <div>Oceania</div>
 <div>Europe</div> <div>Asia</div>	 <div>Antarctica</div> <div>Oceania</div>
 <div>Europe</div> <div>Asia</div>	 <div>Indian Ocean</div> <div>Atlantic Ocean</div>
 <div>Pacific Ocean</div> <div>Atlantic Ocean</div>	 <div>Atlantic Ocean</div> <div>Pacific Ocean</div>



Name: _____

7.1 Science Grade 4 - Page - 330-336

water and land

Continents And Oceans

Look at the pictures and circle the correct words

Africa

Atlantic Ocean

Pacific Ocean

Antarctica

Asia

Arctic Ocean

Indian Ocean

Oceania

Europe

South America

North America

Continents

